

שתי:



# כפולות 2



$1 \times 2 = \square$

$6 \times 2 = \square$

$2 \times 2 = \square$

$7 \times 2 = \square$

$3 \times 2 = \square$

$8 \times 2 = \square$








$4 \times 2 = \square$

$9 \times 2 = \square$

$5 \times 2 = \square$

$10 \times 2 = \square$


השלימו את כפולות 2



שתי:



# כפולות 3



$1 \times 3 = \square$

$6 \times 3 = \square$

$2 \times 3 = \square$

$7 \times 3 = \square$

$3 \times 3 = \square$

$8 \times 3 = \square$





$4 \times 3 = \square$

$9 \times 3 = \square$


$5 \times 3 = \square$

$10 \times 3 = \square$

השלימו את כפולות 3



שמי:



# כפולות 5



$1 \times 5 = \square$

$6 \times 5 = \square$

$2 \times 5 = \square$

$7 \times 5 = \square$

$3 \times 5 = \square$

$8 \times 5 = \square$



$4 \times 5 = \square$

$9 \times 5 = \square$

$5 \times 5 = \square$

$10 \times 5 = \square$

השלימו את כפולות 5



שתי: .....


# פפולות 2



מִתְחִילוּ לְבַרֵּךְ בֵּין כָּל הַרְגִיל אֶל הַמוֹצָאָה שְׁמֵתָיִמָּה לִּי



$1 \times 2 =$



$2 \times 2 =$



$3 \times 2 =$



$4 \times 2 =$



$5 \times 2 =$



$6 \times 2 =$

$7 \times 2 =$



$8 \times 2 =$



$9 \times 2 =$



# קרזיסים ותוצות:

